

Stage 3
Home Learning
Week Seven



Term 3 - Week 7

The digraph /si/ making the sound “zh” as in division.

Often followed by /o/ and /n/

List	Monday	Tuesday	Wednesday	Thursday
Red Spelling Words				
division				
vision				
television				
decision				
erosion				
conclusion				
illusion				
revision				
collision				
version				
Orange Spelling Words				
invasion				
occasion				
occasionally				
intrusion				
adhesion				
artesian				
Asia				
Asian				
Australasia				
In the words below, the letter /u/ is making 2 sounds “y” and “oo”				
Green Spelling Words				
transfusion				
confusion				
In the words below, the letter /x/ is making 2 sounds “k” and “s”				
explosion				
excursion				
Class Vocabulary Words				



SPELLING MENU

Choose some spelling activities and complete them in your book.

<p>Antonyms Write your words and next to each word, write an antonym for that word.</p>	<p>Spelling Code Make up a code for the alphabet. Use this code to write your spelling words.</p>	<p>Spelling Letter Write a letter that includes as many of your words as possible.</p>	<p>Spelling Pictures Draw a picture for each of your words.</p>
<p>Syllable Sort Group your words according to how many syllables they have.</p>	<p>Pyramid Spelling For all of your words, write them in a pyramid shape.</p>	<p>Bubble Words Write some of your words using bubble writing.</p>	<p>Cut n Paste Spelling Spell out your words by using letter cut outs from a newspaper or magazine.</p>
<p>Comic Strip Create a comic strip using as many of your words as possible.</p>	<p>Words in Words Write each word. Next to the word, write as many words that you can find in the spelling word.</p>	<p>Reverse Alphabetical Order Write your words in reverse alphabetical order.</p>	<p>Backwards Words Write your words backwards.</p>

Spelling Grid Activities

Spelling Grid Activities

Name _____

Date _____

Informative Text Fact File - African Lions

Read the facts about lions, then sort them into the correct box in the fact file.
Hint: There are three facts per box.

prey includes antelopes, buffaloes,
zebras, giraffes and crocodiles

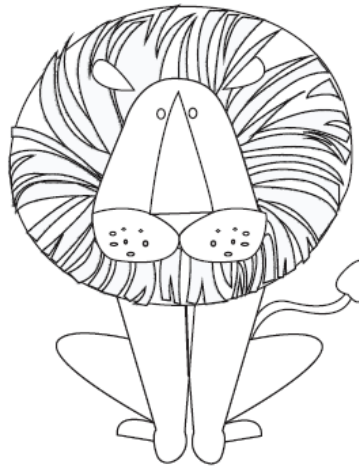
powerful jaws and teeth

female lions (lionesses) are
the hunters of the pride

native to southern and
eastern Africa

need to eat 5-7 kg (11-15 lb)
of meat every day

live for 12-16 years



belong to the cat species

live together in social
groups called 'prides'

live in grasslands, scrub
and open woodlands

males have thick manes to
protect their necks

carnivorous mammals

males weigh around 180 kg (400 lb),
females weigh 130 kg (290 lb)

General Facts	Size and Appearance
Habitat and Lifestyle	Hunting and Eating

Name _____

Date _____

Informative Text - Scaffold

Introduction (This is a general statement about the subject of the text).

Paragraph 1 (Describe one detail about the subject of the text).

Paragraph 2 (Describe one detail about the subject of the text).



Informative Texts - Worksheet


Name _____

Date _____

Paragraph 3 (Describe one detail about the subject of the text).

Conclusion (This is a concluding statement about the subject of the text).

Illustration





This is Charlie. She is a Great Dane. Charlie has a hard time behaving and always seems to get into trouble. Write a silly short story about her adventures during one day left at home alone!

Here are words that may help as you write about Charlie's day!

silly clumsy enormous
damage demolish attack
Trespass entertaining climb
Disobedient hilarious amusing
playful embarrass loveable
leap destroy friendship

One crazy day...

Journal Prompt

Do you have a dog at home? Tell me about them. If you don't have a dog at home what kind of dog would you get if you could?

You need to write a minimum of 4 sentences.

National Dog Day



Journal Prompt

What are some things that we have to do just because? How many can you think of?

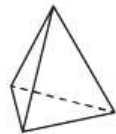
You need to write a minimum of 4 sentences.

National Just Because Day



Monday

1. $27 - 5 =$ _____
2. $82 + 48 =$ _____
3. $50 + 15 =$ _____
4. $54 \div 9 =$ _____
5. $0 \times 4 =$ _____
6. Write the numeral for one thousand, six hundred and fifty-eight: _____
7. Complete this counting pattern:
8, 10, 12, 14, _____, _____, _____
8. What is the difference between 86 and 52? _____
9. Share \$24 between 3 children. _____
10. $50 \text{ cents} + \$2.00 + \$1.00 =$ _____
11. $5 \text{ cents} + 10 \text{ cents} + 20 \text{ cents} =$ _____
12. How many weeks is 56 days? _____
13. 8 hours = _____ minutes
14. A triangle-based pyramid has _____ corners.



15. Which circle has the highest chance of being selected? Black or white? _____




Tuesday

1. $89 - 8 =$ _____
2. $35 + 72 =$ _____
3. $32 - 3 =$ _____
4. $10 \times 6 =$ _____
5. $8 \div 4 =$ _____
6. 3417 is an even number. True or false? _____
7. Complete this counting pattern:
91, 94, 97, 100, _____, _____, _____
8. 5 minus 4 equals: _____
9. Divide 5 by 5. _____
10. $10 \text{ cents} + 5 \text{ cents} + 50 \text{ cents} =$ _____
11. $10 \text{ cents} + \$2.00 + 5 \text{ cents} =$ _____
12. 2 hours = _____ minutes
13. How many days are in December? _____
14. A rectangular prism has _____ corners.

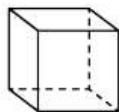


15. Which circle has the lowest chance of being selected? Black or white? _____



Wednesday

1. $31 - 9 =$ _____
2. $31 + 41 =$ _____
3. $80 + 21 =$ _____
4. $6 \times 9 =$ _____
5. $50 \div 5 =$ _____
6. Is 6650 an odd or even number? _____
7. Complete this counting pattern:
26, 33, 40, 47, _____, _____, _____
8. If 72 trucks are parked, 19 are gold and the rest are yellow, how many are yellow? _____
9. Share \$24 between 6 children. _____
10. 10 cents + 20 cents + \$2.00 = _____
11. \$2.00 + \$1.00 + 20 cents = _____
12. How many hours is 300 minutes? _____
13. How many minutes is 240 seconds? _____
14. A cube has _____ corners.



15. Which star has the lowest chance of being selected? Black or white? _____



Thursday


1. $95 + 62 =$ _____
2. $60 - 7 =$ _____
3. $69 + 65 =$ _____
4. $52 \div 2 =$ _____
5. $5 \times 2 =$ _____
6. 9927 is an odd number. True or false? _____
7. Complete this counting pattern:
72, 78, 84, 90, _____, _____, _____
8. If there were 178 fans at a football game, 82 were wearing silver and the rest were wearing maroon, how many were wearing maroon? _____
9. Divide 44 by 4. _____
10. \$2.00 + 50 cents + 20 cents = _____
11. 50 cents + \$2.00 + \$1.00 = _____
12. If it was 12:33 in the night, would you write am or pm?

13. How many days are in July? _____

14. What is the name of this 3D object?



15. Which circle has the lowest chance of being selected? Black or white? _____



6x9	7x8	9x7	6x5	6x6	8x7	8x6	2x9	7x5	8x8	7x7	5x8	9x8	9x9	9x6
9x9	3x6	7x3	8x9	5x9	4x8	3x8	9x3	4x5	4x9	5x6	8x8	4x6	7x4	9x7
8x9	8x8	5x5	9x2	6x6	3x6	3x7	8x3	9x3	5x4	7x6	6x4	7x4	7x8	7x9
6x8	7x5	9x2	5x5	3x6	7x7	5x8	9x5	4x8	9x4	7x3	3x8	9x3	5x6	6x6
7x8	7x6	6x8	4x5	5x7	7x7	0x1	5x8	3x2	5x9	4x8	6x4	9x4	6x5	8x7
6x9	6x6	4x6	7x6	8x6	2x2	2x4	7x5	3x3	5x1	8x6	7x5	5x4	7x7	9x7
8x5	4x7	5x5	5x9	8x4	4x9	6x5	6x6	7x6	6x8	7x5	7x7	7x4	5x5	5x8
9x5	2x9	3x6	4x8	5x2	9x4	8x4	5x9	8x5	7x7	9x1	5x7	8x3	3x9	8x6
9x9	7x6	3x7	6x6	5x6	6x2	6x5	6x6	7x7	2x8	6x7	8x6	4x5	7x5	8x8
6x8	5x8	9x5	4x7	8x4	4x9	4x4	3x4	2x7	9x4	8x4	7x4	9x5	5x8	7x7
7x8	5x5	9x2	6x3	3x7	7x5	6x8	7x6	6x6	6x5	8x3	3x9	5x4	6x4	7x9
9x7	8x7	4x7	5x5	6x5	2x9	3x6	3x7	8x3	9x3	6x6	5x4	6x4	7x8	8x7
8x8	4x7	5x5	8x7	7x7	5x8	5x5	7x4	6x4	7x7	5x7	6x9	4x5	9x3	9x9
6x9	7x8	7x9	8x6	7x6	7x8	6x5	7x3	9x5	9x9	4x9	8x4	8x8	9x7	7x8
7x8	9x9	8x8	9x6	8x7	9x7	6x9	7x8	9x7	8x7	8x8	6x9	9x9	7x9	9x6

COLORING KEY

0 – 7 = white

30 – 49 = yellow

8 – 17 = black

50 – 81 = blue

18 – 29 = orange

Name Labels

Incentive

Create a name label using colours contrasted on black and white patterns

Supplies

- Art paper
- Pencil
- Textas or Coloured Markers

Lesson

- Use a lead pencil to write your name in large letters across the page. Bubble writing is the best type of font to use, but you can use any font that leaves a gap to colour. The letters may be in a straight line or done in a similar fashion to some of the samples.
- Use coloured markers to colour in each letter a different colour ... do not use black for colouring in.
- Use the black texta to outline each letter.
- Discuss different patterns that can be used to cover background. You may decide to use just one pattern or a variety of patterns. It is essential the patterns are done with the black marker and you do intricate, small, repetitive lines. This is normally when children get impatient, so encourage them to take their time and work in one small area at a time until entire background is filled. This can be backed on coloured paper or card for display. Take a photo of finished product and send to your teacher.
- Have Fun!



Term 3 Week 7

OTHER AREAS

Year 5



Research Mount Rushmore and who the carved faces belong to. Think of four people who you think would deserve to go on your own version of Mount Rushmore. Write about why you decided to include them.

Lie down on your back with your arms at your side. Keeping your feet together, raise them 30 cm in the air. Now use them to draw 2D shapes. Which muscles are working? How many shapes can you draw without stopping?

Create an art gallery somewhere in your home. Make labels for each piece of art that includes the title and an explanation of the work. Invite your family to dress up and come visit your art gallery.

Fill a pillowcase with items like shoes, books, and toys. Which item is the heaviest? Once the items are inside, try to lift the pillowcase above your head. How many times can you lift it? Can you lift it using just one arm?

Create a stress ball out of an old sock. Fill it with rice, sand, and a few small objects, e.g. buttons, dice, dried beans. When you are feeling overwhelmed, squeeze the stress ball. Can you feel the different items inside?

Create a newspaper filled with current events. Be sure to include text features like photographs, charts, and timelines. Give your newspaper a name and write at least 3 articles.

Head outside. Make a pile of sand or dirt. Place 3 ice cubes around the pile and watch them melt. How does the moving water cause the sand or dirt to move? Write your findings in your journal.

Create a new animal. What type of body covering will it have? What features will it have to help it survive in its environment? Present your animal to your family. Be sure to describe its structures and functions.

Close your eyes and imagine you have a delicate bubble in your hands. Exhale slowly to inflate the bubble. Can you make the bubble large enough to step inside?

Practice skip counting by 2s, 3s, 4s, 5s, 6s, 7s, 8s, and 9s! While you are counting, do some star jumps, squats, and push-ups. How high can you skip count with each number?

Research totem poles and what they symbolise. Using an empty paper towel roll, scissors, markers, and any other craft items you may like, design your own totem pole. What symbols did you incorporate on your pole?

Set a timer on a phone or a watch for 1 minute. Sit in a quiet room with your eyes closed. Try to open your eyes one second before the timer goes off. No peeking! Can you do it for 2 minutes?
HINT: Try counting.

Grid Activities

August

<p>It is Book Week! Who is your favourite author? Why do you like their books?</p> 	<p>Do you think people will still be reading hard copies of books in 10 years? Why/why not?</p> 	<p>Write about your favourite childhood book.</p> 	<p>It is National Science Week! Studying science in school is important because...</p> 
<p>What are some things that really annoy you? Why?</p>	<p>With 10 seconds left on the clock, it was now or never...</p>	<p>Free choice</p>	<p>What would you like to do when you leave school?</p>
<p>If you had to be a tour guide for your area, where would you take people?</p>	<p>City life is better than country life. Agree or disagree?</p>	<p>There was money everywhere and...</p>	<p>What is the best advice you ever received?</p>
<p>Free choice</p>	<p>Should animals be used for medical research? Why/why not?</p>	<p>I wish there was no more...</p>	<p>What do you think the saying 'The grass is always greener on the other side of the fence,' means? Describe a time when you thought the grass was greener.</p>
<p>Free choice</p>	<p>"Land Ahoy!" yelled the bearded pirate as the...</p>	<p>The school bus pulled up and I realised...</p>	<p>Make a list of the pros and cons of learning a sport.</p>